

Name: \_\_\_\_\_




Read the problem  
Look at the second number.  
Color that many teeth.  
Count how many are left.  
Write that number on the  
line.

$$4 - 2 = \underline{2}$$


$$\begin{array}{r} 5 \\ - 1 \\ \hline \end{array}$$




$$\begin{array}{r} 5 \\ - 2 \\ \hline \end{array}$$




$$\begin{array}{r} 5 \\ - 1 \\ \hline \end{array}$$




$$\begin{array}{r} 5 \\ - 0 \\ \hline \end{array}$$



$$\begin{array}{r} 5 \\ - 2 \\ \hline \end{array}$$



$$\begin{array}{r} 5 \\ - 4 \\ \hline \end{array}$$



$$\begin{array}{r} 5 \\ - 3 \\ \hline \end{array}$$

